



LORD MAHAVIR JAIN PUBLIC SCHOOL

(An English Medium Co-educational Sr. Sec. School, Affiliated to CBSE, New Delhi)

HAVE A FUN FILLED SUMMER VACATION

!! Greetings !!

Dear Parents

Summer vacation begins from 25 May, 2026 to 30 June, 2026.

The School will reopen on 1 July, 2026 (Wednesday)

The much-awaited summer vacations have arrived and it's the perfect time for your child to relax, explore and engage in fun learning activities. These holidays provide an excellent opportunity for your child to grow in various ways from developing new skills to improving their creativity. While it's essential for children to take breaks and have fun it's also crucial to incorporate learning into the holiday activities.

The following suggestions will guide you in balancing play and education at home:

- Engage in meaningful conversations with your child every day.
- Read a variety of storybooks to enhance their imagination and comprehension skills.
- Assign small household responsibilities to develop independence.
- Teach them important moral values through everyday interactions.
- Participate in indoor games together to build bonding and motor skills.

This worksheet is designed to provide educational, fun-filled activities that will help your child continue their learning journey while enjoying the holiday season.

!!Let's make this summer both exciting and educational!!

English Conversation

Encourage your child to use these phrases regularly throughout the day, whether it's during meals, playtime, or bedtime:

Good morning, Mummy! Good morning, Daddy!

- Can I go out and play, please?

YOUR EFFORTS WILL BE HIGHLY APPRECIATED

"THE BEAUTIFUL THING ABOUT LEARNING IS THAT NO ONE CAN TAKE IT AWAY FROM YOU."

FEW REMINDERS FOR THE STUDENTS:-

- Read all the instructions carefully.
- Be creative, innovative and imaginative.
- Homework should be neat & clean.
- Original Drawings/ Illustrations and Creative use of material will be appreciated.
- Go for walk daily with your family.
- Do Meditation and Simple Yoga Exercise daily.
- Don't forget your magic words: Please, Sorry & Thank You- Make these a part of your personality.
- Don't watch too much television & Mobile Phones.
- This is your chance to look after your parents, grandparents, elders and even younger brothers and sisters. You can surely help around the house.
- Take care of your health by eating fresh and healthy food.
- Revise all work done in your class of all subjects.
- Bring the Holiday work with you when you come on 1 July, 2026.

SUMMER BREAK

From 25 May, 2026 to 30 June, 2026

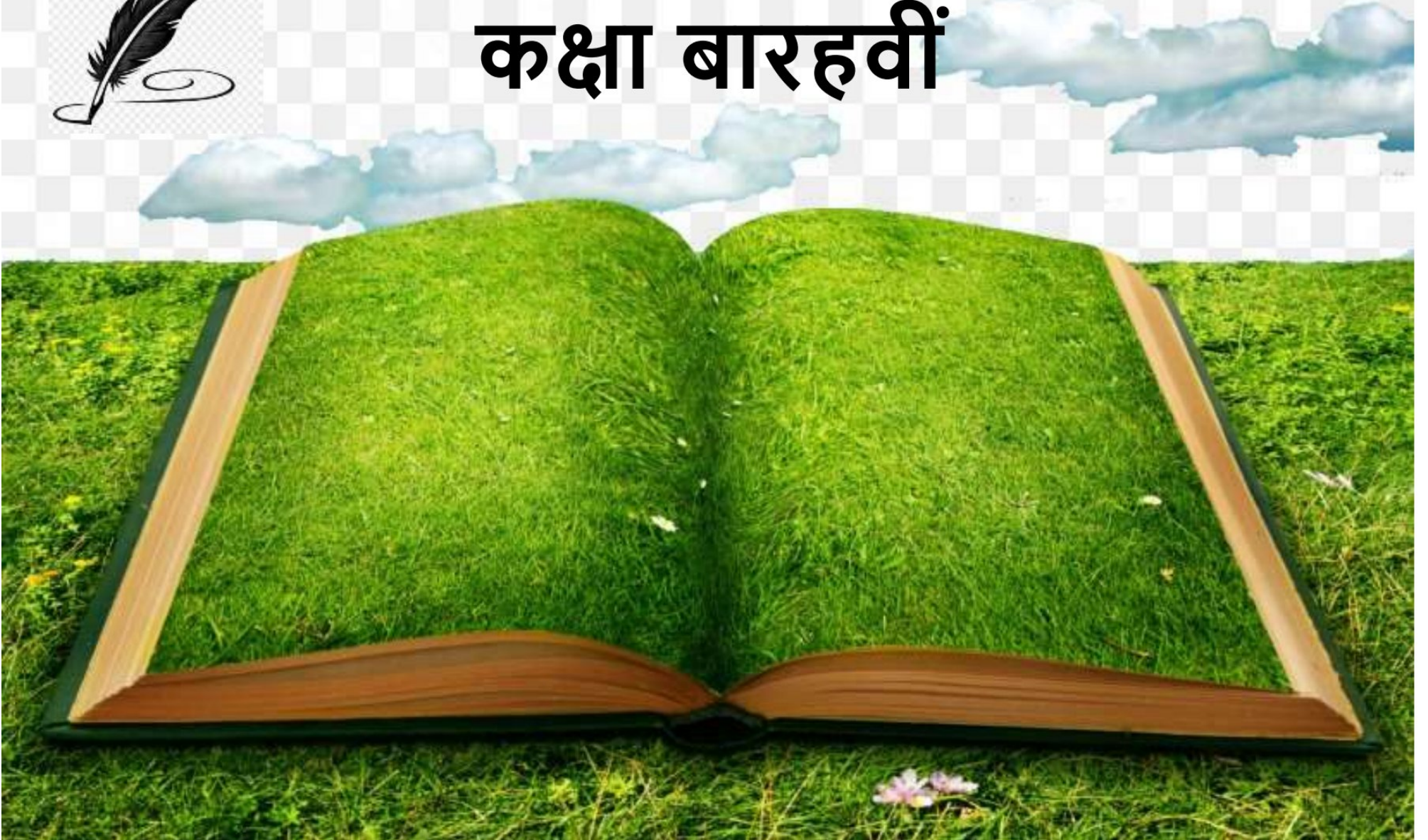
The School will reopen on 1 July, 2026 (Wednesday). The School timings will be as follows:

Classes Nursery to UKG	7:40 am to 12:00 noon
Classes 1st to 10th	7:40 am to 1:50 pm
Classes 11th & 12th	7:40 am to 12:30 pm



HAVE A FUN FILLED VACATION

ग्रीष्मावकाश गृह कार्य 2026-27 हिंदी कोर (302) कक्षा बारहवीं



सामान्य निर्देश :

दिए गए निर्देशानुसार संपूर्ण कार्य करें।
कार्य सुंदर एवं स्पष्ट होना चाहिए।
रचनात्मक कार्य A4 शीट पर करें
परियोजना कार्य प्रैक्टिकल फ़ाइल या सर्पिल फ़ाइल में करें।

रचनात्मक कौशल

1. निम्नलिखित विषयों पर दृश्य नाटक या मोनोलॉग लिखें:
 - मोबाइल की लत
 - "पृथ्वी बोल उठी" – जलवायु परिवर्तन पर मोनोलॉग
2. हिंदी में किसी एक विषय पर "इन्फोग्राफिक्स" बनाएं
विषय:
 - साइबर सुरक्षा
 - कृत्रिम बुद्धिमत्ता
 - जल संरक्षण
 - भारत में शिक्षा सुधार
3. समाचार विश्लेषण (News Analysis) लेखन
किए जाने वाले कार्य:


नई शिक्षा नीति 2020
पक्ष -विपक्ष में तर्क लिखें।

पठन व लेखन कौशल—

निम्नलिखित में से किसी एक पुस्तक को पढ़ें

- गोदान -मुंशी प्रेमचंद
- गुनाहों का देवता -धर्मवीर भारती

(कथा पुस्तक के संक्षिप्त समीक्षा, मुख्य पात्रों का वर्णन, अपनी पसंदीदा



सृजनात्मक कौशल -

विद्यालय पत्रिका हेतु अपने लिखी हिंदी भाषा में रचनाएं (कविता, कहानी, लेख) लिखनी है यह रचनाएं आपकी मौलिक व टाइप होनी चाहिए। किसी और लेखक या कवि की कॉपी पेस्ट रचनाएं स्वीकार्य नहीं होंगी।

॥ परियोजना कार्य-- (सीबीएसई द्वारा निर्देशित)

निम्नलिखित में से किसी एक विषय पर प्रयोजना कार्य करें- (कम से कम)

■ भारतीय ग्रामीण जीवन (पाठ 14- पहलवान की ढोलक)

- आजादी से पहले बाद में तथा वर्तमान में स्थिति
- सुधार की आवश्यकताएं



-आप की भूमिका\ योगदान(सुझाव)

▪ हिंदी कविता में प्रकृति चित्रण(पाठ-6 उषा, पाठ 10-बगुलों के पंख)

-विभिन्न कवियों की कविताओं का तुलनात्मक अध्ययन

- भाषा और शैली की विशेषताएं

▪हिंदी साहित्य का इतिहास

▪ भारतीय ज्ञानपीठ पुरस्कृत हिंदी साहित्यकार (उपलब्धियों का परिचय)

आप सभी स्वस्थ रहें ,मस्त रहें ,खुश रहें, पेरेंट्स की सहायता करें ।



HOLIDAY HOMEWORK
CLASS XII
SUBJECT ACCOUNTANCY

- Revise Periodic syllabus.
- Do additional questions in your fair notebooks
- (1) Chapter 1 Fundamentals of partnership questions 73-106
- (2) Chapter 2 Change in Profit sharing Ratio questions 49-66

Project Work Guidelines

Students are required to select any one partnership firm such as a medical store, boutique, coaching centre, restaurant, automobile shop, or chartered accountant firm, and collect the following information:

- Name and type of business activity of the firm
- Year of establishment
- Number of partners in the firm
- Details related to accounting aspects as mentioned in the partnership deed, such as:
 - Profit sharing ratio
 - Interest on capital
 - Interest on drawings
 - Salary or commission to partners Etc.
 - Any other important terms of the partnership deed.

Students should present the project neatly and systematically with proper headings and relevant details on A-4 Size sheet.

HOLIDAY HOMEWORK
CLASS XII
SUBJECT Business Studies

- **Revise Periodic syllabus.**

Ch1 Nature and significance of management

Ch2 Principles of management

Ch3 Business environment

Ch12 Consumer protection act 2019

- **Do Assignment in your fair notebook.**

- **Project work**

The students are required to visit any one of the following

A departmental store

An Industrial unit

A fast food outlet

Any other organisation.

You are required to observe the application of the general principles of management advocated by Fayol and the application of scientific management techniques by F.W Taylor.

OR

Study of marketing mix of any of the following product

- **Bathroom cleaner**
- **Blanket**
- **Bread**
- **Butter**
- **Car**
- **Chocolate**
- **Crockery**
- **Cycle**
- **Eraser**
- **Fairness cream**
- **Hair dye**
- **Jams**

- **Ladies bag**
- **Mobile**
- **Pen**
- **Pencil**
- **Shampoo**
- **Washing machine**
- **Air conditioner**
- **Hair oil**
- **Lipstick**
- **Noodles**
- **Ketchup**
- **Shaving cream**
- **Toothpaste**

Assignment

Chapter Test – 1

Nature and Significance of Management

Q1.“It acts as the binding force between departments and ensures that all actions are aimed at achieving the goals of the organisation.”The statement highlights the following characteristic of coordination:

- (a) Coordination is an all-pervasive function
- (b) Coordination is the responsibility of all managers
- (c) Coordination is a continuous process
- (d) Coordination ensures unity of action

Q2.Fashion House, a company with several branches all over the country, needs a team of designers. Similarly, another company, Heavy Tools Ltd., requires mechanical engineers with knowledge of the latest technology to develop heavy machinery tools. Identify the function of Management that is needed to satisfy the needs of the above companies.

- (a) Organising
- (b) Directing
- (c) Staffing

(d) Controlling

Q3. Policy formulation is the function of —

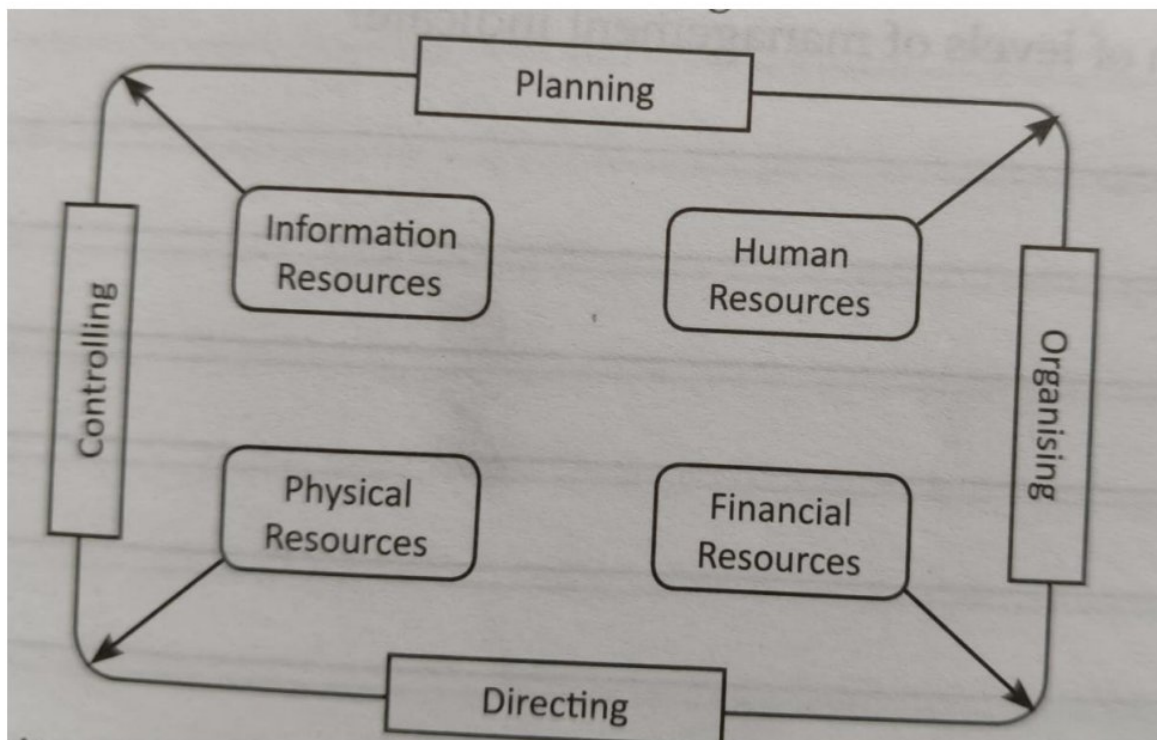
- (a) Top level managers
- (b) Middle level managers
- (c) Operational managers
- (d) All of these

Q4. Unlike professions such as medicine or law, which require practising doctors or lawyers to possess valid degrees, it is not mandatory for a manager to possess any specific professional degree. Identify the characteristic of profession being discussed above which is not being strictly met by management.

- (a) Well-defined body of knowledge
- (b) Restricted entry
- (c) Professional association
- (d) Ethical code of conduct

Q5 Identify the feature of management highlighted in the given figure:

- (a) Management is a group activity
- (b) Management is an intangible force



- (c) Management is multi-dimensional
- (d) Management is all-pervasive

Q6.KTX Group is rolling out an initiative to help create wealth for its employees through the implementation of employee stock options. Through motivation and leadership, the management helps individuals develop team spirit, cooperation, and commitment to the success of the group.The following importance of management is highlighted above:

- (a) Management helps in achieving personal objectives
- (b) Management helps in the development of society
- (c) Management creates a dynamic organisation
- (d) Management increases efficiency.

Q7.“It acts as the binding force between departments and ensures that all actions are aimed at achieving the goals of the organisation.”

The statement highlights the following characteristic of coordination:

- (a) Coordination is an all-pervasive function
- (b) Coordination is the responsibility of all managers
- (c) Coordination is a continuous process
- (d) Coordination ensures unity of action

Q8.In order to be successful, an organisation must change itself and its goals according to the needs of the environment. During the COVID-19 pandemic, online classes were started rather than offline classes by KVS. Evaluation was also conducted through online mode. Teachers used platforms like Google Classroom, Google Duo, and Google Meet.Identify the characteristic of management mentioned in the above case.

- (a) Management is an intangible force
- (b) Management is a dynamic function
- (c) Management is a group activity
- (d) Management is a continuous process

Q9.Read the following statements — Assertion (A) and Reason (R).

Assertion (A):Management does not meet the exact criteria of a profession. However, it does have some features of a profession.



Reason (R):Entry into the management profession is restricted through acquiring an MBA degree from any institute, but there is no professional association to regulate managers.

Choose the correct alternative:

- (a) Both Assertion (A) and Reason (R) are true and Reason (R) is the correct explanation of Assertion (A).
- (b) Both Assertion (A) and Reason (R) are true, but Reason (R) is not the correct explanation of Assertion (A).
- (c) Assertion (A) is true, but Reason (R) is false.
- (d) Assertion (A) is false, but Reason (R) is true.

Q10 Read the following statements —

Statement 1:Management is termed as a “Process.”

Statement 2:Management involves a series of interrelated functions such as planning, organising, staffing, directing, and controlling.

Choose the correct alternative:

- (a) Statement 1 is correct and Statement 2 is not correct.
- (b) Statement 2 is correct and Statement 1 is not correct.
- (c) Both Statements 1 and 2 are correct.
- (d) Both Statements 1 and 2 are not correct.

Q11 What does the pyramid form of levels of management indicate?

Q 12 Is there any difference in planning, organising, staffing, directing, and controlling in various organisations such as a school, a club, a restaurant, and a steel plant? To which characteristic of management is this case related?

Q13.Rishitosh Mukerjee has recently joined AMV Ltd., a company manufacturing refrigerators. He found that his department was under-staffed and other departments were not cooperating with his department for the smooth functioning of the organisation. Therefore, he ensured that his department had the required number of employees and that cooperation with other departments improved.

- (a) Identify the level at which Rishitosh Mukerjee was working.
- (b) Also state three more functions required to be performed by Rishitosh Mukerjee at this level.

Q14. XYZ Power Ltd. set up a factory for manufacturing solar lanterns in a remote village as there was no reliable supply of electricity in rural areas. The revenue earned by the company was sufficient, so the company decided to increase production to generate higher sales. For this, they decided to employ people from nearby villages as very few job opportunities were available in that area. The company also decided to open schools and crèches for the children of its employees.

Identify and explain the objectives of management discussed above.

Q15. The management of Shivam Ltd. strongly believes that the members of an organisation should work towards fulfilling common organisational goals. This requires teamwork and integration of efforts of individuals, departments, and specialists. This is because all the individuals and departments depend upon each other for information and resources to perform their respective activities. Managers need to reconcile differences in approach, timing, efforts, or interests. At the same time, management should enable all its members to grow and develop. Thus, there is a need to harmonise individual goals and organisational goals.

Assignment


Chapter Test – 2

Principles of Management

Q1 'Flavours of South' is a famous chain of South Indian restaurants. It believes in complete co-operation between labour and management. The management encourages employees to give constructive suggestions and takes employees into confidence for all important decisions. Which principle of scientific management has been followed by 'Flavours of South'?

- (a) Science, not rule of thumb
- (b) Harmony, not discord
- (c) Co-operation, not individualism
- (d) Development of each and every person to his or her greatest efficiency and prosperity

Q2. One of the principles of management has been violated in the given picture. Identify it.



- (a) Principle of Unity of Direction
- (b) Principle of Esprit de Corps
- (c) Principle of Unity of Command
- (d) Principle of Harmony, not Discord

Q3 Reena and Meena are working in the same organisation. They have similar experience and are performing the same task. However, they are paid at different rates. Which principle of management is violated?

- (a) Unity of Direction
- (b) Order
- (c) Equity
- (d) Initiative

Q4 "Once selected, employees should be kept at their position for a minimum fixed tenure." Which principle of management is highlighted in the statement?

- (a) Discipline
- (b) Division of Work
- (c) Unity of Command

(d) Stability of Tenure

Q5. Principles of management equip managers to foresee the cause-and-effect relationship of their decisions and actions so that the wastages associated with the trial-and-error approach may be overcome.

Identify the point of significance of principles of management highlighted here.

(a) Ensure optimum utilisation of resources and effective administration

(b) Helps in fulfilling social responsibility

(c) Meet changing environment requirements

(d) Helps in taking scientific decisions

Q 6 Pioneer Ltd. is dealing in fruit juices and hair oils. To ensure unity of action and coordination, it has made two separate divisions for each product. Each division has its own incharge, plans and execution resources. Thus, both the divisions are moving towards the same objectives through focused efforts. Identify the principle of management followed by Pioneer Ltd. in the above case.

(a) Esprit de corps

(b) Equity

(c) Unity of direction

(d) Authority and responsibility

Q7. The technique of scientific management given by Taylor, which aims to establish interchangeability of manufactured parts and products is _____.

(a) Method Study

(b) Motion Study

(c) Standardisation

(d) Differential Piece Wage System

Q8. According to Taylor, even a small production activity like loading pig iron into boxes can be scientifically planned and managed. This results in tremendous saving of human energy as well as reducing wastage of time and materials. The more sophisticated the processes, greater would be the savings. In the present context, the use of internet management has brought about dramatic improvement in internal efficiencies and customer satisfaction. Identify the principle of management highlighted above.

(a) Science, not Rule of Thumb

(b) Harmony, not Discord



(c) Cooperation, not Individualism

(d) Development of each and every person to his/her greatest efficiency

Q9. The manager in 'Geeta Solutions Limited' is very lax with his subordinates and does not explain to them the parameters, rules and regulations for reporting and completion of work. Identify the principle of management ignored by the manager here.

(a) Scalar Chain

(b) Discipline

(c) Authority and Responsibility

(d) Unity of Command

Q10. Seema, a student of management, likes to relate what she learnt in the class to real life situations. She observed many situations. While watching educational programmes, factories manufacturing components for products like automobiles, computers and mobile phones were shown. Name the concept of Scientific Management that should be adhered to while manufacturing components for such products.

Q 11 Pawan is working as a 'Production Manager' in CFL Ltd. engaged in manufacturing of CFL bulbs. There is no conflict between the management and workers. The working conditions are very good. The company is earning profits. As a policy matter, management is sharing the gains with the workers because they believe that prosperity of the company cannot exist for a long time without the prosperity of its employees. State the principle of management described in the above paragraph.

Q12. 'Aapka Vidyalaya' believes in holistic development of students and encourages team building through curricular, co-curricular and sports activities. A committee of ten prefects was constituted to plan different aspects of the upcoming programme. They all decided to use recycled paper for decoration. There was a spirit of unity and all members supported one another. With mutual trust and belongingness, the programme was systematically planned and executed. Kartik, one of the prefects, realised that unknowingly the group had applied one of the principles of management while planning and executing the programme. He was so inspired by the success of the function that he asked his father to apply the same principle in his business. His father replied that he was already using this principle.

(a) Identify the principle of management applied for the success of the programme.

(b) State any two features of management highlighted in the above paragraph.

Q13. Sanchit, after completing his entrepreneurship course from Sweden, returned to India and started a coffee shop named 'Aroma Coffee Can' in a famous mall in New



Delhi. The speciality of the coffee shop was the special aroma of coffee and a wide variety of flavours to choose from. Somehow, the business was neither profitable nor popular. Sanchit was keen to find out the reasons. He appointed Sandhya, an MBA from a reputed college, as a manager to find the causes for the same.

Sandhya took feedback from the clients and found out that they loved the special unique aroma of coffee but were unhappy with the long waiting time taken to process the order. She analysed and found out that there were many unnecessary obstructions in between which could be eliminated. She fixed a standard time for processing the order. She also realised that there were some flavours whose demand was not enough. So, she also decided to stop the sale of such flavours. As a result, within a short period of time, Sandhya was able to attract the customers.

Identify and explain any two techniques of scientific management used by Sandhya to solve the problem.

Q14. Arnav, a manager of Micro Ltd., does not distribute the work amongst his subordinates according to their capabilities. He has given the work on the basis of favouritism.

(a) Which principle of management is overlooked?

(b) Give some of its violating effects.

Q15. Hina has been appointed as the Chief Organiser of a week-long cultural event. Being a staunch follower of scientific management, she decides to execute her work by putting into practice the various techniques of scientific management.

On the basis of several observations, she is able to determine that the standard time taken by the security officer at the gate to check the credentials of each visitor is 30 seconds. So, she decides to employ two persons on this job for every function along with the other necessary support staff. She considers the fact that every day, the functions will take place in three shifts of four hours each; therefore, it is important to give breaks to the support staff even in a single shift to take her/his lunch etc. Moreover, on introspection, she determines that the best way to distribute refreshment boxes to the visitors will be to hand them over to them at the exit gate as it would help to save time and eliminate any kind of confusion.

In the context of the above case, identify and explain the various techniques of work study which have been put into practice by Hina.

Chapter 3

Business Environment

Assignment



Q1. In a recent ruling, the Supreme Court of India has ordered an immediate stop on commercial activities within a specified radius of the Taj Mahal and asked Agra Development Authority to ensure compliance. Which dimension of Business Environment is reflected here?

- (a) Social Environment
- (b) Technological Environment
- (c) Legal Environment
- (d) Political Environment

Q2. Government of India demonetised notes of ₹500 and ₹1,000 on 8th November, 2016. Demonetisation means:

- (a) They ceased to be legal tender except for a few specified purposes.
- (b) These notes could not be banked but could be freely used otherwise.
- (c) These notes could be converted into gold coins from Reserve Bank of India.
- (d) These notes could be used for household purposes but not for business purposes.

Q3. Which of the following are examples of Legal Environment?

- (i) Advertisement of alcoholic beverages is prohibited
- (ii) Decrease in interest rate on loans
- (iii) Increase in demand for organic foods
- (iv) Digilockers for storing documents
- (v) In 1993, the Supreme Court passed an order to close the iron foundries around Taj Mahal

Codes:

- (a) (i) and (iv)
- (b) (i) and (ii)
- (c) (ii) and (iii)
- (d) (i) and (v)

Q4. The sum total of all individuals, institutions and other forces that are outside the control of a business enterprise but may affect its performance is known as _____.

- (a) Business Environment



- (b) Social Environment
- (c) Political Environment
- (d) Economic Environment

Q5. Nowadays, gym craze among youngsters has increased. As a result, new fitness centres, gyms and spas are opening. Identify the feature of the business environment reflected in the above statement.

- (a) The totality of the external forces
- (b) Specific and general forces
- (c) Interrelatedness
- (d) Dynamic nature

Q6. Standards adopted by the business enterprises should be _____ so that they can be modified as per changes taking place in the business environment.

- (a) Static
- (b) Flexible
- (c) Rigid
- (d) Stagnant

Q7. Specific attitudes that elected government representatives hold towards business is categorised as _____ environment.

- (a) Legal
- (b) Social
- (c) Technological
- (d) Political

Q8. Read the following statements — Assertion (A) and Reason (R).

Assertion (A): With the advent of television, the cinema and radio industries were adversely affected.

Reason (R): Television is capable of functioning of cinema as well as radio industries more economically from home.

- (a) Both Assertion (A) and Reason (R) are true and Reason (R) is the correct explanation of Assertion (A).

(b) Both Assertion (A) and Reason (R) are true but Reason (R) is not the correct explanation of Assertion (A).

(c) Assertion (A) is true but Reason (R) is false.

(d) Assertion (A) is false but Reason (R) is true.

Q9. Make in India' is an initiative launched by the Government of India to encourage national and multinational companies to manufacture their products in India. It focuses on job creation and skill enhancement in twenty-five sectors of the economy. Under the initiative, brochures on these sectors and a web portal were released. The initiative aims at high quality standards and minimising the impact on the environment. It also seeks to attract foreign capital investment in India.

In the context of the above case, identify and explain the various dimensions of business environment being referred to in the paragraph.

Q10 The government has launched a single debit come credit card to increase the ease and uses of consumer. The card which is called national common mobility card having unique advantages for making payment in metro buses parking and making transaction during visit abroad. After hearing the news mega bank decided to launch mega mobility card on similar lines so that they might be the first to exploit the opportunity arising due to the increasing trend of digitalization. In order to improve their performance they laid down a plan to hire more people in their marketing department and prepared guidelines to train their sales force to market the new credit card facility launched by the bank. By quoting the lines identify and explain any two points of importance of understanding business environment discussed above.

Assignment

Chapter 12

Consumer Protection Act, 2019

Q1. Which authority has been established under the Consumer Protection Act, 2019 to protect and promote consumer rights?

- a) RBI
- b) SEBI
- c) CCPA
- d) TRAI

Q2. Which of the following is a consumer right?

- a) Right to hoard goods



- b) Right to choose
- c) Right to exploit
- d) Right to overcharge

Q3. Under the Consumer Protection Act, 2019, e-commerce companies are also covered under:

- a) Consumer rights
- b) Banking law
- c) Criminal law
- d) Tax law

Q4. The Consumer Protection Act, 2019 provides protection only for offline purchases.

(True / False)

Q5. A consumer can file a complaint through electronic mode under the Consumer Protection Act, 2019.

(True / False)

Q6. Assertion (A): Consumers have the right to seek redressal against unfair trade practices.

Reason (R): The Consumer Protection Act provides a mechanism for filing complaints and obtaining compensation.

- a) Both A and R are true and R is the correct explanation of A.
- b) Both A and R are true but R is not the correct explanation of A.
- c) A is true but R is false.
- d) A is false but R is true.

Q7. Assertion (A): Misleading advertisements are prohibited under the Consumer Protection Act, 2019.

Reason (R): The Act aims to protect consumers from unfair trade practices.

- a) Both A and R are true and R is the correct explanation of A.
- b) Both A and R are true but R is not the correct explanation of A.
- c) A is true but R is false.
- d) A is false but R is true.



Q8.A shopkeeper sold an expired food product to a customer without informing him. Identify the consumer right violated in this case.

Q9.An online shopping company refused to replace a defective mobile phone received by a customer. Name the authority where the customer can file a complaint.

Q10.A company advertised a fairness cream claiming “100% guaranteed results,” but the product failed to deliver such results. Identify the type of unfair practice involved.

Q11.Riya purchased a mixer grinder from an electronics store. Within two days, the machine stopped working. The seller refused to replace it and blamed the customer for mishandling the product.

Answer the following questions:

- a) Identify the problem faced by Riya.
- b) Which consumer right has been violated?
- c) Suggest any two remedies available to Riya under the Consumer Protection Act, 2019.

Q12.A customer ordered a branded watch from an e-commerce website. Instead of the original product, a duplicate watch was delivered. The company denied responsibility.

Answer the following questions:

- a) What type of unfair trade practice is involved here?
- b) Name any two rights available to the consumer.
- c) Which authority can help the consumer in this situation?

Q13.Rahul visited a restaurant where unhygienic food was served, causing him food poisoning. The restaurant management refused to compensate him.

Answer the following questions:

- a) Which consumer right has been violated?
- b) What action can Rahul take against the restaurant?
- c) Mention any two responsibilities of consumers while purchasing goods or services.

Q14.A coaching institute advertised “100% Board Exam Success Guarantee” to attract students. Many students later complained that the claims were false and misleading.

Answer the following questions:

- a) Identify the unfair trade practice involved.
- b) Which authority can take action against misleading advertisements?



c) State any two measures to protect consumers from such practices.

Q15. Meena purchased a water purifier with a three-year warranty. After six months, the purifier stopped functioning. The company neither repaired nor replaced the product despite repeated complaints.

Answer the following questions:

- a) Which consumer right has been violated?
- b) What legal remedy is available to Meena?
- c) Explain the importance of consumer awareness in such situations.

CLASS – XII

SUBJECT- MATHEMATICS

HOLIDAYS HOMEWORK

Theme : Calculus in Real Life

Topic: Business and Profit Analysis

Explain the following activities with at least two real-life applications or case studies related to each activity.”

Stock Market or Investment Growth

- ❖ Study profit and loss in simple investments.
- ❖ Represent growth using graphs.
- ❖ Explain how mathematics helps in financial planning.

Profit Optimization Activity

- ❖ Use mathematical functions to determine maximum profit or minimum cost.
- ❖ Draw graphs showing increasing and decreasing profit.

Small Business Profit Analysis

- ❖ Analyse the profit earned from a small business idea such as handmade items, stationery, bakery products, craft items, etc.
- ❖ Calculate cost, revenue, and profit.
- ❖ Represent data using tables and graphs.

Instructions :

- ❖ Use coloured charts, diagrams, flowcharts, and graphs wherever possible.
- ❖ Maintain neatness and creativity in presentation.
- ❖ Include real-life examples .
- ❖ Add QR codes, infographics, or AI-themed illustrations for enhancement.
- ❖ **Revise the periodic 1 Syllabus**
- ❖ **Do the Assignment on notebook .**
- ❖ **Complete your Mathematics Practical File .**

HOLIDAYS HOMEWORK 25-26

**SCIENCE
PHYSICS
CLASS 12**

- 1. There is no such things as magic, though there is such a thing as knowledge of the hidden ways of Nature.**

Find out a trick from your own choice
Explore science behind the same, submit Report in brief.

- 2. A science project for holiday homework could involve exploring ecosystems, simple machines, or even demonstrating chemical properties of metals.**

Select any one investigatory project from list attached and make a Report under following heads

Introduction

Certificate

Knowledgment

Index

Introduction

Aim

Appratus required

Procedure

Observation

Results

Conclusion

Bibliography

It should be hand written.

Use A-4sized sheet

Paste releavent pictures.

Prepare Syllabus



Physics

Ch-1 electrostatic fields and charges

Ch-2 electrostatic potential and capacitance

4) Science is organized knowledge. Wisdom is organized life" or "The science of today is the technology of tomorrow" .

List of Projects

- 1) Half wave rectifier
- 2) Full wave rectifier
- 3) Transformer
- 4) Internal resistance of cell

Holiday homework

Class -XII (2026-27)

Investigatory projects in Biology

INSTRUCTIONS:

1. Project should be handwritten and neatly presented.
2. Use A4 size sheets and maintain proper page numbering.
3. Include cover page, certificate, acknowledgement, index, and bibliography.
4. Collect data through observation, survey, or experiment.
5. Write original content; avoid direct copying from source.
6. Use simple scientific language and proper headings.
7. Submit the project file in a proper folder before the deadline.

Topics includes:

1. Seed dispersal mechanisms and significance of dispersal
2. Outbreeding devices in flowering plants and its significance
3. Polycystic ovarian syndrome
4. Reproductive health/ Sexually Transmitted Diseases
5. Genetic abnormalities and its causes
6. Cystic fibrosis
7. Congenital defects- causes and possible remedies
8. Human Genome Project
9. DNA Fingerprinting and its application



10. Cancer (can take specific Cancer)
11. Auto- immune diseases (Rheumatoid Arthritis)
12. Drugs and their abuse
13. Alcohol abuse
14. Microbes in human welfare
15. Antibiotic resistance
16. Global warming: How is it related to the outburst of new viral infections such as SARS, MERS, Ebola etc
17. Applications of biotechnology
18. Gene editing and its applications
19. RNA interference
20. Gene therapy
21. Transgenic animals
22. Medicinal drugs that are banned across the world
23. Ethical issues in DNA fingerprinting and biotechnology
24. Adaptations in living organisms
25. Bioinformatics
26. RNA interference: How is it useful in developing vaccines?
27. Medicinal plants in our surroundings
28. Soil less culture techniques and their applications
29. Genetically modified organisms

LORD MAHAVIR JAIN PUBLIC SCHOOL
ENGLISH HOLIDAY HOMEWORK (2026-27)

Class XII

Subject - English

Holidays provide mental rejuvenation, personal time to improve effectively and creatively. It should reflect originality, neat presentation, research work, and language skills.

INSTRUCTIONS

- ✍ Holiday Homework must be done neatly in a separate file/folder.
- ✍ Use colored headings and proper margins.
- ✍ Include research, creativity, and presentation skills.
- ✍ Writing should be clear and legible.
- ✍ Avoid blurred or unclear images.
- ✍ Complete all work independently.
- ✍ Revise the syllabus covered till May regularly.
- ✍ One assignment is also attached at the end of it .Do it neatly in English fair notebook.

SECTION A : LITERATURE

Activity- Project as per CBSE guidelines on one of the topics from your literature book

Must Include:

- Word limit 1000- 1500
- Handwritten Project
- Report including an index
- Proper format with examples and uniform font
- Cover page, Acknowledgement, Certificate, Objectives, Conclusion and Bibliography

Instructions:

Use pictures, drawings, charts, newspaper cuttings, or creative illustrations to make your project attractive and informative.

SECTION B : POETRY

Poem - Keeping Quiet

Creative Task

- Thematic Map: The Significance of 12 (Visual diagram or clock face)
- Create a split visual layout showing:

Green Wars vs In the shade

Hurt Hands vs Clean clothes

Engines vs Sudden Strangeness

SECTION C : WRITING SKILLS

NOTICE WRITING

Attempt any TWO notices:

1. You are the Secretary of the Literary Club of your school. Draft a notice regarding a "An inter-school Debate Competition."
2. Draft a notice informing students about a "Literacy week "to be celebrated in school.
3. Draft a notice for a Blood Donation Camp to be organized in your colony.

LETTER TO THE EDITOR

Attempt any THREE letters:

1. Write a letter to the Editor about Digital Addiction in your city among the students.
2. Write a letter regarding the excessive use of online Gaming among the students.
3. Write a letter to the Editor highlighting the ways to prevent and remain safe from cyberbullying.
- 4 Write a letter to the Editor about your views on Commercialisation of Education.

SECTION D : THEME BASED ASSIGNMENT WORK

Topic: *Theme* : Shakespearean Plays

Choose any one play:

*Hamlet



*King Lear

Task

Present the play as a sophisticated fictional novella with analytical depth.

Include

1. Author Study of Shakespeare
2. Historical Background of the Play
3. Fictional Adaptation (1500-2000 words)
4. Exploration of Themes and Conflicts
5. Character Transformation Chart
6. Literary Devices Used
7. Critical Review and Personal Interpretation
8. Bibliography/References

Enrichment Activity

Compare the Shakespearean play with a modern-day situation or film adaptation.

Instructions

- *Use an A4-sized file/project sheet
- *Use neat handwriting
- *Add illustrations/borders
- *Use proper headings
- *Maintain cleanliness and creativity

LORD MAHAVIR JAIN PUBLIC SCHOOL
ENGLISH XII
ASSIGNMENT 2

Q1) REFERENCE TO CONTEXT

Sahib's family is among them, Seemapuri was then a wilderness. It still is, but it is no longer empty. 5

- a) From where has Sahib come?
- b) What was his profession?
- c) Did he want to go to school?
- d) Describe his house.
- e) What was his ambition?

Q2) If we were not so single minded.....death. 5

- a) Who is referred to we?
- b) What is the main theme of the poem?
- c) What effect does keeping quiet bring in our lives?
- d) Why does the poet want us to do nothing?
- e) Describe the words huge silence?

Q3) i) How was garbage wrapped in wonders for the children like Sahib ? (2*5=10)
ii) Describe the life of Mukesh.
iii) How did Mr. Lamb motivate Derry?
iv) What did the poet meant by total inactivity?
v) Difference between Sahib and Mukesh.

LORD MAHAVIR JAIN PUBLIC SCHOOL

HOLIDAYS HOMEWORK (2026-27)

POLITICAL SCIENCE

CLASS -XII

- Read newspaper daily and note the important political (India/World) happenings. (In Revision notebook)
- Read thoroughly, learn and revise Unit Test 1 syllabus i.e.
 - a) Book 1 : Ch.-End of Bipolarity
Ch. - New Centers of Power
 - b) Book 2: Ch. - Challenges of Nation Building
- Do the given assignments in a separate notebook

- **POLITICAL SCIENCE (PROJECT)**
 - Make a project on any one of the following topics.
 - Project should be strictly handwritten relevant pictures must be pasted beautifully.
 - Prepare the same topic for Viva Voce.
 - Use Practical File to make project.
 - Cover page of the project must be relevant for the topic.
 - Project file must be neat and beautiful.
 - Use stencil for headings.

The Project can be made on any one of the topics given in the syllabus.

FEW SUGGESTIVE TOPICS FOR PROJECTS

1. Division of Germany with special focus on the construction and dismantling of the Berlin Wall.
2. Disintegration of USSR with special focus on Gorbachev.
3. Cover the negative as well as positive aspects of relationship between India and the following countries.

Focus on any one of the following (current updates should be highlighted):

- a) Relationship between India and Russia
- b) Relationship between India and China
- c) Relationship between India and Pakistan



- d) Relationship between India and Bangladesh
- 4.ASEAN
- 5. European Union and BREXIT
- 6.SAARC
- 7. India's Nuclear Policy
- 8. United Nations with focus on India's candidature in Security Council.
- 9. UN Agencies – UNICEF, UNESCO, WHO
- 10. Partition of India-Theory behind it and its legacy
- 11. Planning Commission v/s NITI AAYOG
- 12. Emergency – A blot on Indian Democracy.

The Project should consist of the following pages:

A. Topic

B. Certificate

C. Index

D. Acknowledgement

E. Content: Minimum 20 pages

F. Bibliography

G. Teacher's Evaluation Report



Self Assessment Test

INSTRUCTIONS:

- (i) All questions are compulsory.
- (ii) Section A—Question number 1-8 are multiple choice questions of 1 mark each.
- (iii) Section B—Question number 9-10 are of 2 marks each. Answers to these questions should not exceed 50 words each.
- (iv) Section C—Question number 11-12 are of 4 marks each. Answers to these questions should not exceed 100 words each.
- (v) Question number 13-14 are passage, cartoon and map-based questions them.
- (vi) Section D—Question number 15-16 are of 6 marks each. Answers to these questions should not exceed 170 words.
- (vii) There is an internal choice in 6 marks questions.

SECTION-A

1. Which was the first Soviet Republic to declare its independence from Soviet Russia?
(a) Lithuania (b) Moldova
(c) Poland (d) Georgia
2. The most severe conflict took place in the Balkan Republics of:
(a) Bulgaria (b) Greece
(c) Yugoslavia (d) Macedonia
3. In which year Russia took over the USSR seat in the UN
(a) December 1991 (b) November 1988
(c) September 1990 (d) October 1992
4. Which country in Central Asia witnessed a Civil War that went on for ten years?
(a) Azerbaijan (b) Kyrgyzstan
(c) Tajikistan (d) Turkmenistan

Assertion Reason based questions:

Directions for Q. Nos. 5 and 6

In the following questions, a statement of Assertion (A) is followed by a statement of Reason (R). Choose the appropriate answer from the options given below as the correct answer:

- (a) Both Assertion (A) and Reason (R) are True and Reason (R) is the correct explanation of Assertion (A).
 - (b) Both Assertion (A) and Reason (R) are True but Reason (R) is not the correct explanation of Assertion (A).
 - (c) Assertion (A) is True but Reason (R) is False.
 - (d) Assertion (A) is False but Reason (R) is True.
5. **Assertion (A):** The end of the Soviet bloc paved the way for the emergence of many new countries.
Reason (R): Power relations in world politics changed and thus it led to change in the relative influence of ideas and institutions.
6. **Assertion (A):** Russia was the only republic among fifteen republics who dominated everything and people in the region.

Reason (R): Russia was the successor of economic movement

7. Arrange the following in chronological order.
- (i) Soviet invasion of Afghanistan
 - (ii) Russian Revolution
 - (iii) CIS
 - (iv) Shock Therapy

Choose the correct one:

- (a) (iii), (ii), (iv), (i) (b) (ii), (iv), (i), (iii)
- (c) (ii), (i), (iii), (iv) (d) (ii), (iii), (i), (iv)

8. Given below are two statements:

Statement I: The Soviet economy became more developed than the rest of the world except the US due to socialist system of the USSR.

Statement II: The socialist system of the USSR made internal implications of the Soviet political and economic institutions fulfilled the aspirations of the people.

In the light of above statements, choose the correct answer from the options given below:

- (a) Both Statement I and Statement II are True.
- (b) Both Statement I and Statement II are False.
- (c) Statement I is True, but Statement II is False.
- (d) Statement I is False, but Statement II is True.

SECTION-B

9. The rise of Nationalism and desire for the Sovereignty was one of the main consequence of the disintegration of the USSR. How?
10. Was Shock Therapy the best way to make a transition from communism to capitalism?

SECTION-C

11. How the Soviet Union had become administratively and politically stagnant under communist rule?
12. Do you agree with this statement that the Soviet economy was faltering in the late 1970s and became inert? If yes, then give the appropriate answer.

SECTION-D

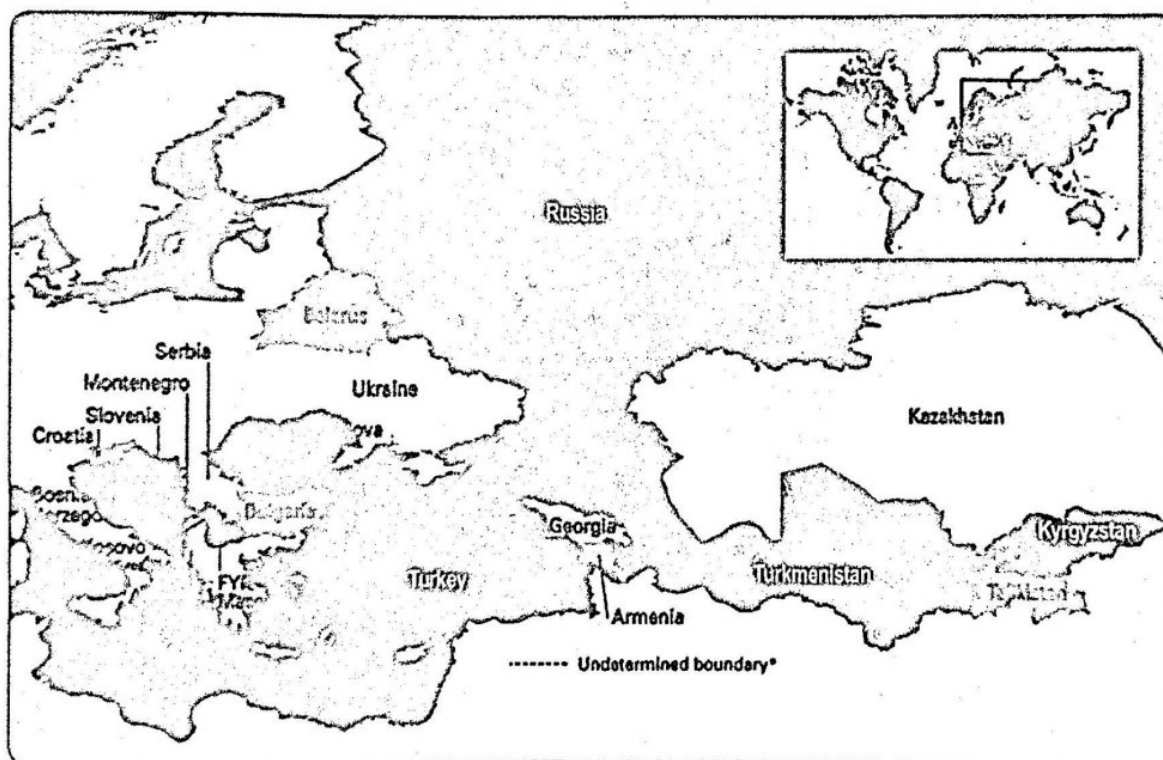
13. Read the passage given below and answer the questions that follow:

The Union of Soviet Socialist Republics (USSR) came into being after the socialist revolution in Russia in 1917. The revolution was inspired by the ideals of socialism, as opposed to capitalism, and the need for an egalitarian society. This was perhaps the biggest attempt in human history to abolish the institution of private property and consciously design a society based on principles of equality. In doing so, the makers of the Soviet system gave primacy to the state and the institution of the party.

- (i) What was the biggest attempt in human history to abolish the institution of private property?
 (a) US Revolution (b) French Revolution
 (c) Socialist Revolution (d) Capitalist Revolution
- (ii) Russian Revolution was inspired by the ideals of
 (a) Socialism (b) Capitalism
 (c) Guild Socialism (d) All of the above
- (iii) Who was the Founder of the Bolshevik Communist party?
 (a) Lenin (b) Stalin
 (c) Rousseau (d) Montesquieu
- (iv) USSR came into existence in
 (a) 1916 (b) 1917
 (c) 1918 (d) 1919

14. In the given map of Asia, identify countries on the basis of the information given below and write their correct names in your answer book along with the respective serial numbers of the information used and the concerned alphabets as per the format that follows.

Sl. No. of the information	Name of the country
(i)	
(ii)	
(iii)	
(iv)	



- (i) An Asian country that witnessed a Civil War that went on for ten years till 2001.
 (ii) One country that is an example of Baltic Republics.
 (iii) A country that inherited the Soviet seat in the UNSC. A country that split peacefully into two countries.
 (iv) A country that became the first of the 15 Soviet republics to declare its independence.

SECTION-E

15. (a) Which countries are called Balkan States?
 (b) Discuss the Turbans and conflicts in central Asia.

16. India has maintained good relations with all the Post-Communist countries. Substantiate this statement with an appropriate answer.

OR

Lack of democracy and the absence of freedom of speech stifled people in the USSR. The people often expressed their dissent in jokes and cartoons but ultimately it resulted in the disintegration of the USSR. Was this disintegration could be stopped for a time being? Justify your answer.

Self Assessment Test

INSTRUCTIONS:

- (i) All questions are compulsory.
- (ii) Section A—Question number 1-8 are multiple choice questions of 1 mark each.
- (iii) Section B—Question number 9-10 are of 2 marks each. Answers to these questions should not exceed 50 words each.
- (iv) Section C—Question number 11-12 are of 4 marks each. Answers to these questions should not exceed 100 words each.
- (v) Question number 13-14 are passage, cartoon and map-based questions them.
- (vi) Section D—Question number 15-16 are of 6 marks each. Answers to these questions should not exceed 170 words.
- (vii) There is an internal choice in 6 marks questions.

SECTION-A

1. What is the objective of the ASEAN?
 - (a) To increase competition among the member countries for better production.
 - (b) To integrate the economies of the region to make region more attractive for investors
 - (c) To promote political cooperation in South East Asia and ensure economic stability in the region.
 - (d) None of the above
2. When was ASEAN established?
 - (a) 1967
 - (b) 1970
 - (c) 1964
 - (d) None of these
3. Which of the following was the objective of the EU?
 - (a) Establishing an economic and a monetary union
 - (b) Implementing a common foreign and defence policy
 - (c) Developing relations in the spheres of home affairs and justice
 - (d) All of the above
4. The total number of members of BRICS are:
 - (a) 2
 - (b) 3
 - (c) 4
 - (d) 5
5. Given below are two statements:
Statement I: Japan is a country of East Asia which faces the maximum natural calamities like earthquake, Tsunami.
Statement II: Under the leadership of Zhou Enlai, Communist revolution started in 1949 in China.
In the light of above statements, choose the correct answer from the options given below:
 - (a) Both Statement I and Statement II are True.
 - (b) Both Statement I and Statement II are False.

- (c) Statement I is True, but Statement II is False.
- (d) Statement I is False, but Statement II is True.

Assertion-Reason Questions

Directions for Q. Nos. 6 and 7

In the following questions, a statement of Assertion (A) is followed by a statement of Reason (R). Choose the appropriate answer from the options given below as the correct answer:

- (a) Both Assertion (A) and Reason (R) are True and Reason (R) is the correct explanation of Assertion (A).
 - (b) Both Assertion (A) and Reason (R) are True but Reason (R) is not the correct explanation of Assertion (A).
 - (c) Assertion (A) is True but Reason (R) is False.
 - (d) Assertion (A) is False but Reason (R) is True.
6. Assertion (A): The Treaty of Maastricht was signed on 7th February 1992, establishing the European Union.
Reason (R): This treaty laid the foundation for common foreign and security policy, cooperation and justice, home affairs and the creation of a single currency.
 7. Assertion (A): The new economic policies helped the Chinese economy to break from stagnation.
Reason (R): Privatisation of agriculture led to a remarkable fall in the agricultural production and rural incomes.
 8. India's 'Look East' Policy since the early 1990s and 'Act East' Policy since 2014 have led to greater economic interaction with the East Asian nations.

SECTION-B

9. Japan and South Korea are constantly emerging as a contemporary centres of power. Substantiate your answer with the help of suitable examples.
10. How ASEAN provides a political and economic forum to Asian countries?

SECTION-C

11. What are the differences between the European Union and ASEAN countries?
12. What are the objectives of establishing Regional organizations?

SECTION-D

13. Study the given map, identify countries on the basis of the information given below and write the correct names in your answer book along with the respective serial numbers of the information used as per the format that follow.



Sr. No. of the information	Name of the Country
(i)	
(ii)	
(iii)	
(iv)	

- (i) Which two European countries resisted the Maastricht Treaty?
- (ii) What is the name of the European Union currency?
- (iii) Which countries are called Scandinavian countries?
- (iv) Which country has given up its membership from the European Union?

- (iii) **What does circle represent?**
 - (a) Unity of BRICS
 - (b) Unity of ASEAN
 - (c) Unity of SAARC
 - (d) Unity of EU
- (iv) **'ASEAN Way' is a form of**
 - (a) Formal, confrontationist and co-operative inter-action.
 - (b) Informal, non-confrontationist and co-operative inter-action.
 - (c) Informal, confrontationist and co-operative interaction
 - (d) None of the above

14. Study the picture and answer the questions that follow.



- (i) Which Regional organisation does this flag /logo belong to?
 - (a) EU
 - (b) BRICS
 - (c) ASEAN
 - (d) SAARC
- (ii) **Ten stalks represent:**
 - (a) Ten South African countries bound together in friendship and solidarity.
 - (b) Ten South Asian Countries bound together in friendship and solidarity.
 - (c) Ten South East Asian countries bound together in friendship and solidarity.
 - (d) None of the above.

SECTION-E

- 15. Evaluate any three major factors responsible for making the European Union a political force from an economic force.

OR

Discuss the role of European Union as a super national organisation.

- 16. Explain the factors responsible for the rise of the Chinese economy.

OR

What innovative economic strategies are Japan and North Korea adopting to navigate contemporary challenges?

Self Assessment Test

INSTRUCTIONS:

- (i) All questions are compulsory.
- (ii) Section A—Question number 1-8 are multiple choice questions of 1 mark each.
- (iii) Section B—Question number 9-10 are of 2 marks each. Answers to these questions should not exceed 50 words each.
- (iv) Section C—Question number 11-12 are of 4 marks each. Answers to these questions should not exceed 100 words each.
- (v) Question number 13-14 are passage, cartoon and map-based questions them.
- (vi) Section D—Question number 15-16 are of 6 marks each. Answers to these questions should not exceed 170 words.
- (vii) There is an internal choice in 6 marks questions.

SECTION-A

1. The cities divided into communal zones during the partition were
 - (a) Gwalior, Ahmedabad and Adilabad
 - (b) Lahore, Amritsar and Islamabad
 - (c) Lahore, Amritsar and Calcutta
 - (d) Delhi, Hyderabad and Nawalgarh
2. India constituted based on a parliamentary form of government.
3. Which challenge was not faced by India at the time of independence?
 - (a) To ensure development and Well-Being of the Society
 - (b) Challenge to Shape a Nation
 - (c) To Establish Democratic Setup
 - (d) Pollution and Environmental degradation
4. Division of heart here refers to
 - (a) Displacement
 - (b) Partition of British India
 - (c) Rehabilitation
 - (d) Formation of new states

Assertion Reason Questions:

Directions for Q. Nos. 5 and 6

In the following questions, a statement of Assertion (A) is followed by a statement of Reason (R). Choose the appropriate answer from the options given below as the correct answer:

- (a) Both Assertion (A) and Reason (R) are True and Reason (R) is the correct explanation of Assertion (A).
- (b) Both Assertion (A) and Reason (R) are True but Reason (R) is not the correct explanation of Assertion (A).
- (c) Assertion (A) is True but Reason (R) is False.
- (d) Assertion (A) is False but Reason (R) is True.

5. Assertion (A): Writers, poets and film-makers in India and Pakistan have expressed the ruthlessness of the killings and the suffering of displacement and violence in their novels.
Reason (R): It was a violent separation of communities who had hitherto lived together .

6. Assertion (A): The Muslim League was formed to protect the interests of the Muslims in colonial India.
Reason (R): Muslim League believed that India must treat persons of all religions equally.

7. Given below are two statements:
Statement I: All Muslim majority areas wanted to be merged with Pakistan.
Statement II: Partition of India created communal riots in the different parts of the country.
In the light of above statements, choose the correct answer from the options given below:

- (a) Both Statement I and Statement II are True
- (b) Both Statement I and Statement II are False.
- (c) Statement I is True, but Statement II is False.
- (d) Statement I is False, but Statement II is True.

8. Arrange the following in chronological order:

- (i) Formation of Punjab
- (ii) Formation of Nagaland
- (iii) Formation of Arunachal Pradesh
- (iv) Formation of Chhattisgarh

Choose the correct one

- (a) (iv), (ii), (iii), (i)
- (b) (iii), (ii), (i), (iv)
- (c) (ii), (i), (iii), (iv)
- (d) 4, 1, 2, 3

SECTION-B

9. Freedom came with partition, violence and displacement. Critically examine.
10. The formation of Andhra Pradesh spurred the struggle for making other states on linguistic lines. Explain.

SECTION-C

11. How was the integration of the territory of India to be achieved?
12. It is said that the nation is to a large extent an "imagined community" held together by common beliefs, history, political aspirations and imaginations. Identify the features that make India a nation.

OR

Elaborate the problems faced by the Government of India immediately after independence.

SECTION-D

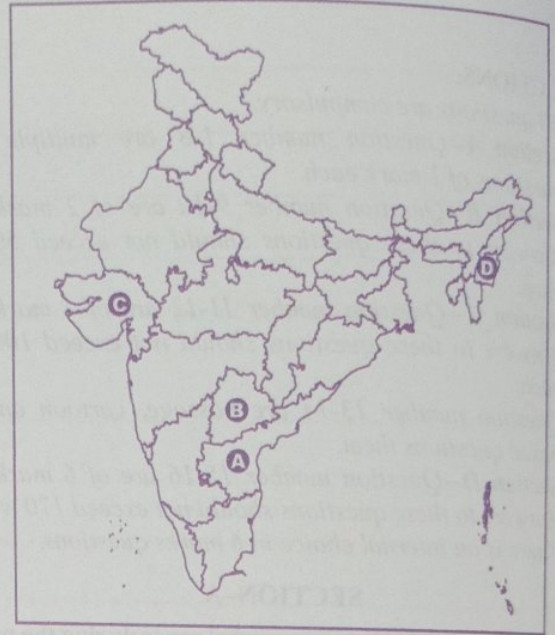
13. Study the given cartoon carefully and answer the questions that follows:



- (i) Identify the person sitting in the centre of cartoon.
 - (a) Bhim Rao Ambedkar
 - (b) Jawaharlal Nehru
 - (c) Rajendera Prasad
 - (d) Mahatma Gandhi
- (ii) What was the challenge surrounding him?
 - (a) Formation of religious states
 - (b) Formation of ethnic states
 - (c) Formation of states
 - (d) Formation of linguistic states
- (iii) Which was the first state formed on the basis of language?

(a) Andhra Pradesh	(b) Tamil Nadu
(c) Maharashtra	(d) Telangana
- (iv) How was the above problem resolved?
 - (a) By giving separate nation heed
 - (b) By giving separate statehood
 - (c) By giving different identity
 - (d) None

14. Mark the state where
- (i) The leader went on a fast into death for its creation
 - (ii) Razakars unleashed a reign of terror.
 - (iii) Sardar Patel came from.
 - (iv) Merger agreement happened with the king in September 1949.



SECTION-D

15. Describe the events that led to the merger of Hyderabad and Manipur with the Union of India?

OR

Linguistic states and the movements for the formation of these states changed the nature of Indian democratic politics. Explain with the help of suitable examples.

16. What were the three challenges before India at the time of independence? How could the solution of these challenges be resolved?

OR

Examine the role of Sardar Vallabhbhai Patel in the integration of Princely States into the Indian Union.

LORD MAHAVIR JAIN PUBLIC SCHOOL

Holidays Homework

Psychology

Class – 12th

- Make one project file on topic- PSYCHOLOGICAL DISORDERS
- Do the given assignment
- Revise the work covered in class.

LORD MAHAVIR JAIN PUBLIC SCHOOL.

Assignment

Class-12th

Subject -Psychology

MM - 40

Section A – MCQs

(10 × 1 = 10 Marks)

Choose the correct answer:

1. Intelligence tests are used to measure:

- a) Emotions
- b) Personality
- c) Mental abilities
- d) Attitude

2. Individual differences occur due to:

- a) Heredity only
- b) Environment only
- c) Both heredity and environment
- d) None of these

3. IQ stands for:

- a) Intelligent Quotient
- b) Intelligence Quotient
- c) Internal Quotient
- d) Intellectual Quality

4. Gifted children generally have IQ above:

- a) 70
- b) 90
- c) 120
- d) 130

5. Stress is a:

- a) Physical response only
- b) Psychological response only
- c) Combination of physical and psychological responses
- d) Disease

6. Hans Selye proposed the concept of:

- a) Emotional Intelligence
- b) General Adaptation Syndrome
- c) Multiple Intelligence
- d) Cognitive Dissonance

7. Positive stress is known as:

- a) Distress
- b) Anxiety
- c) Eustress
- d) Trauma

8. Problem-focused coping aims at:

- a) Avoiding stress
- b) Managing emotions
- c) Solving the stressful situation
- d) Ignoring problems

9. Aptitude refers to:

- a) Present ability
- b) Future potential to learn
- c) Emotional stability
- d) Personality trait

10. Meditation and yoga help in:

- a) Increasing stress
- b) Reducing stress

c) Creating conflict

d) Weakening memory

Section B – Very Short Answer Questions

(4 × 2 = 8 Marks)

11. Define intelligence.

12. What is stress?

13. Mention any two characteristics of gifted children.

14. What is aptitude?

Section C – Short Answer Questions

(4 × 3 = 12 Marks)

15. Explain the meaning of individual differences.

16. Describe any three sources of stress.

17. Differentiate between problem-focused coping and emotion-focused coping.

18. Explain emotional intelligence.

Section D – Long Answer Question

(1 × 4 = 4 Marks)

19. Explain Gardner's Theory of Multiple Intelligences.

Section E – Long Answer Question

(1 × 6 = 6 Marks)

20. Explain the concept of stress and discuss various strategies for managing stress effectively.

HOLIDAY HOMEWORK
SUBJECT – COMPUTER

Instructions for All Classes

1. Work should be neat, colourful, and creative.
2. Use both handwritten and digital elements wherever possible.
3. Students should do independent research using books, newspapers, internet, or interviews.
4. Mention all sources of information.
5. Originality and innovation will be awarded extra marks.
6. Best projects will be displayed in the school Computer Lab.
7. Use proper headings, borders, and labels to make the project attractive.
8. Projects should be submitted in a well-maintained folder/file.
9. Students are encouraged to use eco-friendly and waste materials for models.
10. Include drawings, diagrams, charts, or screenshots wherever required.
11. Use simple and clear language while writing the content.
12. Students may add creative ideas beyond the given instructions.

Class XII

Topic: “Research Project – Ethical Use of AI”

• Prepare a detailed investigatory project on:

- o AI ethics
- o Data privacy
- o Cybercrime
- o Bias in AI
- o Future of humans with AI

• Include:

- o Introduction
- o Research findings
- o Survey/interview
- o Case studies
- o Conclusion
- o Bibliography

Students may create:

- A research paper
- Podcast
- Website
- Documentary video

Model:

• Create an AI ethics exhibition model or data privacy awareness dashboard.

Topic: “QR Code Homework”

Students create QR codes linking to:

- Their videos
- PPTs

- Voice recordings
- Research links

Model:

- Make a QR code display board with interactive learning resources.

Topic: “Impact of AI on Employment”

- Research:
 - o Jobs replaced by AI
 - o New jobs created
 - o Future opportunities
 - o Skill requirements
- Conduct a survey/interview of professionals or students.

Model:

- Create a future workplace model showing humans and AI working together.

Holiday homework
Subject - Economics
Session 2026-27

* Revise your periodic Syllabus

Macro Economics

Chapter 2 - Basic concept of macro economics

Chapter 5 - Money

Chapter 6 - Banking

Indian Economic development

Ch-1 Indian economy on the eve of Independence

◆ Do the assignments given related to the chapters and paste it in your fair notebook

PROJECT WORK

◆ Do the project work of the following topics roll number wise

◆ Goods and services tax act and its impact on GDP -roll number 1,8 15, 22,30

◆ Vertical farming and alternate way -roll number 2,9,16,23,26,31

◆ G-20 inclusive and action oriented - roll number 3,10, 17 ,24,32

◆ New education policy (NEP) 2020:A promise for a new education system-roll no 4,11,18,29

◆ Sustainable development goals (SDG's)roll no-5,12,19,28,33

◆ Cashless economy roll no- 6,13,20,27

◆ Environmental crisis roll no-7,14,21,25

ASSIGNMENT

Ch- Basic Concepts of Macroeconomics

Ch-Money and banking



Ch-Indian economy on the eve of Independence

Q.1

Of the total production taking place in the economy a large number of products don't end up in final consumption and are not capital goods either. They are not _____ but are _____.

- (a) final goods, intermediate goods
- (b) intermediate goods, final goods
- (c) capital goods, consumption goods
- (d) consumer durables, final goods

Q.2

Match the columns and choose the correct alternative:

Column I.

Column II

- | | |
|---|------------------------------|
| A. Capital consumption. | i) Value Added |
| B. Part of raw material which gets used up. | ii) intermediate consumption |
| C. A stock variable. | iii) depreciation |
| D. A flow variable. | iv) inventory |

Options:

- (a) A-(iii), B-(ii), C-(iv), D-(i)
- (b) A-(ii), B-(i), C-(iv), D-(iii)
- (c) A-(i), B-(ii), C-(iv), D-(iii)
- (d) A-(iv), B-(i), C-(iv), D-(ii)

Q.3

The replacement investment is the same as _____ of capital.

- (a) depreciation
- (b) capital loss
- (c) value added
- (d) intermediate cost



Q.4

If in an economy the value of Net Factor Income from Abroad is ₹200 crore and the value of Factor Income paid Abroad is ₹40 crore, identify the value of Factor Income from Abroad.

- (a) ₹200 crore
- (b) ₹160 crore
- (c) ₹240 crore
- (d) ₹180 crore

Q.5

State with valid reasons, whether the following statements are true or false:

- (a) National income and money creation are examples of stock concept.
- (b) Prizes received by the household from government and firms are included in National Income.
- (c) GDP is the market value of all final goods and services produced by the normal residents or the non-residents in a country during a year.

Q.6

Explain the concept of double counting in the calculation of national income and goods production.

Q.7

What is the difference between a planned and an unplanned inventory accumulation?
Write down the relation between change in inventories and value added of a firm.

Q.8

- (a) "The economic wealth, or well-being of a country does not necessarily depend on the mere possession of resources." Defend or refute the statement with valid reasons.
- (b) "Final goods are meant for final use and will not pass through any more stages of production or transformations at the hands of any producer or consumer." Defend or refute the statement with valid reasons.

ASSIGNMENT



CHAPTER -MONEY AND BANKING

Q.1 Read the following statements and select the correct alternative:

The Reserve Bank of India (RBI) was nationalised in 1949. Its main function is to issue currency notes and regulate the monetary system of the country.

- (i) Statement 1 is true and statement 2 is false.
- (ii) Statement 1 is false and statement 2 is true.
- (iii) Both the statements are true.
- (iv) Both the statements are false.

Q.2 Ms. Asha is explaining to her class about various types of deposits with the commercial banks. She quoted the statement:

“Deposits have a part of money supply and are payable on demand by the commercial banks.”

Identify the type of deposits she was explaining and choose the correct alternative:

- (i) Demand Deposits
- (ii) Time Deposits
- (iii) Post Office Deposits

Alternatives:

- (a) Only (i)
- (b) Only (ii)
- (c) (i) and (ii)
- (d) (i), (ii) and (iii)

Q.3 Instead of outright purchase of securities, when the central government buys government security (e.g. bond) through an agreement which has a specification about the date and price of resale of this security, this type of agreement is called _____. The interest rate at which the money is lent in this way is called the _____.

- (a) Open market operations, bank rate
- (b) Open market operations, repo rate
- (c) Repurchase agreement (repo), repo rate



(d) Reverse repurchase agreement (reverse repo), reverse repo rate

Q.4 Read the following statements and select the correct alternative:

Statement 1: Currency notes and coins do not have intrinsic value like a gold or silver coin.

Statement 2: Currency notes and coins are also called legal tenders as they cannot be refused by any citizen of the country for settlement of any kind of transaction.

(a) Statement 1 is true and statement 2 is false.

(b) Statement 2 is true and statement 1 is false.

(c) Both the statements are true.

(d) Both the statements are false.

Q.5 If the total deposits created by commercial banks are ₹50,000 crore and legal reserve ratio is 20%, then calculate the amount of primary and secondary deposits.

Q.6 Explain the role of the central bank in creating money.

Q.7 What does the bank do with funds that have been deposited with it? How does it ensure that sufficient funds are available to repay any depositor on demand?

Q.8 How can the following tools be used for credit control by the central bank in an economy?

(a) Open Market Operations

(b) Margin Requirements

ASSIGNMENT

Chapter 1 Indian economy on the eve of Independence

Q.1

The sole purpose of the British colonial rule in India was:

(i) To reduce the country to being a raw material supplier for Great Britain's own rapidly expanding modern industrial base.

(ii) To transform the country into a consumer of finished industrial products from Britain.



(iii) To turn India into a sprawling market for the finished products of those industries so that their continued expansion could be ensured to the maximum advantage of their home country — Britain.

Options:

- (a) Only (i) and (ii)
- (b) Only (i) and (iii)
- (c) Only (ii) and (iii)
- (d) All of these

Q.2

Read the following statements and select the correct alternative:

Statement 1: Commercialisation of agriculture was coercively introduced by the Britishers.

Statement 2: The aim of commercialisation of agriculture was to support the British industries.

Options:

- (a) Both the statements are true.
- (b) Both the statements are false.
- (c) Only statement 1 is true.
- (d) Only statement 2 is true.

Q.3 Read the following statements relating to industrial sector during British rule and choose the correct sequence of these statements.

- (i) Cheap imports of British manufactured goods increased in the country.
- (ii) The growth rate of industrial sector was very small.
- (iii) India was reduced to be a mere exporter of raw material.
- (iv) India faced shortage of locally made goods.

Options:

- (a) (i), (ii), (iii), (iv)
- (b) (iv), (iii), (ii), (i)

(c) (iii), (iv), (ii), (i)

(d) (iii), (iv), (i), (ii)

Q.4

Identify the correct statement from the following:

(a) Restrictive policies of commodity production, trade and tariff pursued by the colonial government adversely affected the structure, composition and volume of India's foreign trade.

(b) Effective trade policies of commodity production, trade and tariff pursued by the colonial government favourably affected the structure, composition and volume of India's foreign trade.

(c) Liberal policies of commodity production, trade and tariff pursued by the colonial government adversely affected the structure, composition and volume of India's foreign trade.

(d) Restrictive policies of commodity production, trade and tariff pursued by the colonial government favourably affected the structure, composition and volume of India's foreign trade.

Q.5

State and discuss any two indicators that help in measuring the health status of a country.

Q.6

Comment upon any two salient features of occupational structure of India on the eve of Independence.

Q.7 "Under the colonial regime, basic infrastructure such as railways, ports, water transport, posts and telegraph developed. However, the real motive behind infrastructure development was not to provide basic amenities to the people but to subserve various colonial interests."

What objectives did the British intend to achieve through their policies of infrastructure development in India?

Q.8

Identify and briefly explain three key features of the Indian economy on the eve of Independence that contributed to its predom



LORD MAHAVIR JAIN PUBLIC SCHOOL
Holiday Homework
Subject – PHYSICAL EDUCATION

XII NM	1 Any two Common Postural Deformity & their corrective measures. (Knock knees,Bow Legs and Round shoulder)	On Chart paper
	2 Fixture of Tabular method in league tournament . (Explain with examples)	On Chart paper
XII Com	1 Any two Common Postural Deformity & their corrective measures. (Spinal curvature- Kyphosis, Lordosis & Scoliosis)	On Chart paper
	2 Any one Yoga pose. (Explain their procedure, benefits and contradiction)	On Chart paper
XII Hum	1 Check BMI any five members of your family.	On Assignment Sheets
	2 Fixture of Bye & Seeding method of Knockout tournament . (Explain with examples)	On Chart paper